
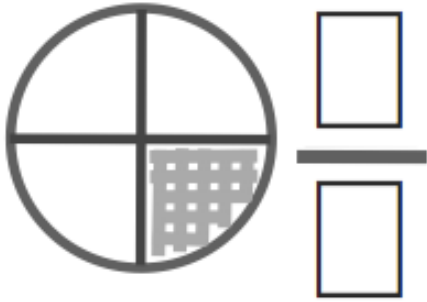


Name:

Show All work. No calculators.


Time it took to take test:

1. $\begin{array}{r} 392 \\ + 568 \\ \hline \end{array}$	2. What is the perimeter of the rectangle below? 	3. $47 \div 5 =$
4. $4.2 + 3.5 + 0.25 + 4.0$	5. Write the number of shaded sections shown as a fraction. 	6. What is the final cost of one hamburger at \$1.99 and two bags of French fries at \$0.51 each, with a total tax of 17¢?
7. Find the sixth number in this counting sequence: 8, 16, 24, . . .	8. $\begin{array}{r} 49 \\ \times 5 \\ \hline \end{array}$	9. Eighty-five marbles were divided equally into five cups. How many marbles are in each cup?
10. $\begin{array}{r} \$26.41 \\ 37.85 \\ + 26.91 \\ \hline \end{array}$	11. $8 \times 7 \times 10$	12. $\begin{array}{r} 7004 \\ - 2517 \\ \hline \end{array}$

Name:

Show all work. No calculators.

Page 2

<p>13.</p> $\begin{array}{r} 67 \\ \times 8 \\ \hline \end{array}$	<p>14. The clock says 10:45 a.m. Adam's appointment is in 2 1/2 hours. What time is his appointment?</p>	<p>15.</p> $\begin{array}{r} 41861 \\ + 26959 \\ \hline \end{array}$
<p>16. Find the missing number.</p> $\begin{array}{r} \\ + 329 \\ \hline 787 \end{array}$	<p>17.</p> $6 \overline{)79}$	<p>18. Which digit in 4.803 is in the hundredths place?</p>
<p>19. Find the missing number.</p> $\begin{array}{r} 74 \\ - \\ \hline 19 \end{array}$	<p>20.</p> $\frac{1}{4} + \frac{2}{4} =$	

4TH GRADE WRITING SAMPLE

Students should complete the following writing prompt *in cursive* (if they are able), and add at least one more sentence to explain their choice in their best handwriting. Students should complete all writing on their own with no assistance from anyone.

What
ARE.....You
Thankful
for?

I am most thankful for...
